

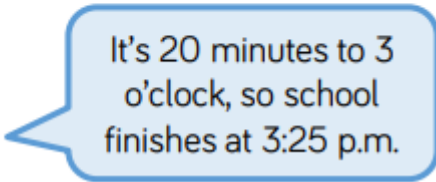


Tuesday's Maths Tasks - Year 3

	School ends in 45 minutes. What time will it be?	<p><u>Reasoning challenge</u></p> <p>Do you agree or disagree with Amir? Explain your answer, and show your working out.</p>
Amir says, 	 <p>It's 20 minutes to 3 o'clock, so school finishes at 3:25 p.m.</p>	

True or false?

100 minutes is the same as 1 hour.

It took 1 hour 50 minutes for Hannah to do her washing. She started at 5:10pm and ended at 7pm.

Jack ran 3 times round the park. It takes him 15 minutes to run once round, so 3 times round took him 50 minutes.

Hamish takes 2 minutes to brush his teeth. That's the same as 120 seconds.

Lucas ran quicker than Sam because Lucas started at 4:40 and ended at 5pm, and Sam started at 5:10 and finished at 5:30.

Clive took 45 minutes to walk to the shops. He left home at 5:25 and he reached the shops at 6:20.